

**SEETA-EXAMINATIONS COMMITTEE
SPECIAL SET FOUR 2022**

Social Studies and Religious Education

Time allowed: 2 hours and 15 minutes

INDEX NUMBER

--	--	--	--	--	--	--	--	--

NAME:

Signature:

EXAMINER'S USE ONLY

District

Emis NO

A	
B	
TOTAL	

Read the following instructions carefully:

- 1. The paper is made up of section A and B.**
- 2. Section A has 40 questions (40 marks).**
- 3. Section B has 15 questions. (60 marks).**
- 4. Answer ALL questions. All answers to both section A and B must be written in the spaces provided.**
- 5. All answers must be written in blue ink.**
- 6. Any handwriting that cannot easily be read will lead to loss of marks.**
- 7. Unnecessary alteration of work may lead to loss of marks.**
- 8. Show all the necessary side work in pencil.**

<u>PARENT'S COMMENT</u>	<u>SIGNATURE</u>

Section A (40 marks).

1. The soldiers were facing north east. They were ordered to turn anti – clock wise 135°. To which new direction were they facing?

.....

2. Draw a picture of a grass thatched hut in the space below.



3. What is **natural vegetation**?

.....

.....

4. Name the King of Buganda that the Namirembe agreement of 1955 allowed to return from exile.

.....

5. Give one reason why deserts receive little or no rainfall.

.....

.....

6. Give one use of a school signpost.

.....

.....

7. Who were the first people to use the centralized system of administration in Uganda?

.....

8. What type of tax is valued Added tax?

.....

9. Why is the year 1964 important in the political history of Tanzania?

.....

10. Name the tribe of the Southern Bantu that came to East Africa from South Africa.

.....

11. How did the British colonialists try to disarm the Acholi just before the outbreak of the Lamogi rebellion?

.....

.....

12. Why does R. Congo carry more water to the Ocean than all other rivers of Africa put together?


.....

.....

13. How can a map reader locate Uganda on the map of Africa?

.....

Use the diagram below to answer questions 14 – 16.



14. Name the colour marked with letter f.

.....

15. What does the colour marked with letter a stand for?

.....

16. Identify the attribute of Uganda as a nation that is found in the place marked G

.....

17. Why did the church missionary society fund the activities of IBEACO in Uganda when it had run bankrupt?

.....

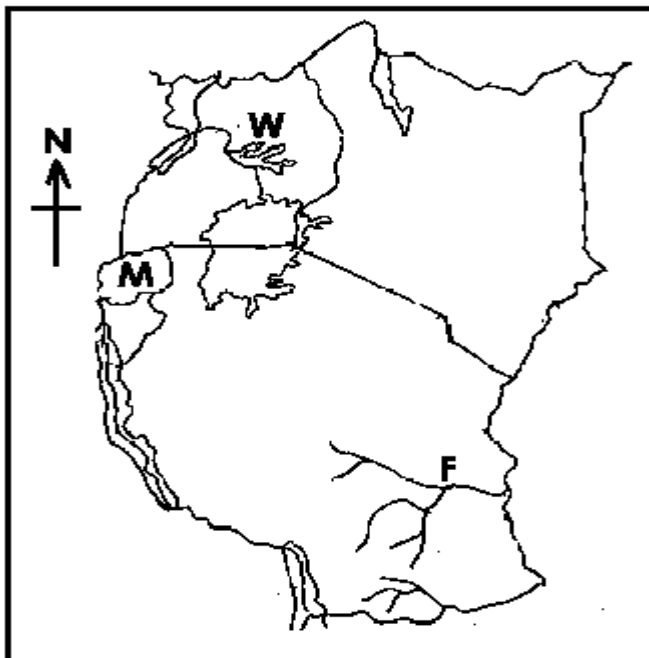
18. Why do many rivers begin from the high lands?

.....

19. Which city in East Africa started as a store for tools during the construction of the Uganda railway?

.....

Use the map below to answer questions 20 – 23.



20. Name the river marked F.

.....

21. Use letter X to show the longest and deepest lake in East Africa.

.....

22. Why is the lake marked W covered by vegetation?

.....

23. Compare Uganda and country M in terms of location.

.....

24. Why do nationalists in Uganda regard Semei Kakungulu as a traitor?

.....
.....

25. Which type of education did the missionaries introduce in Uganda?

.....

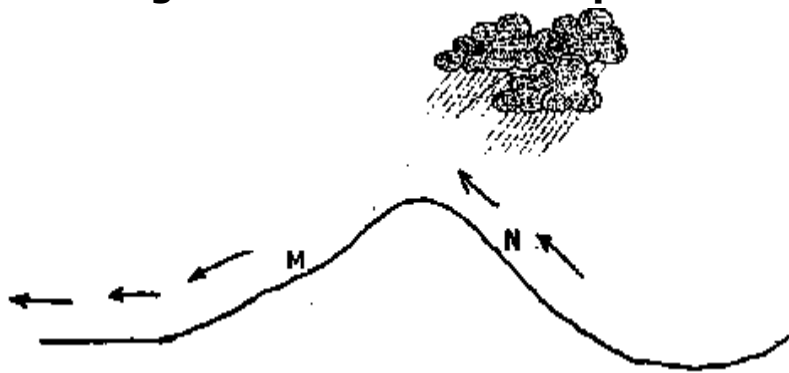
26. Suggest one way of solving problems of heavy traffic in Kampala.

.....

27. How is a rift valley similar to a horst mountain in terms of formation?

.....
.....

Use the diagram below to answer questions 28 – 30.



28. Name the type of rainfall shown above.

.....

29. Why is the wind blowing over side N able to form rainfall?

.....
.....

30. What name is given to the side of the mountain marked M?

.....

31. Identify the items below.



.....

32. How did the items in (31) above improve trade in East Africa?

.....

33. Which body organizes elections in Uganda?

.....

34. State one negative effect that rapid population increase has on the environment.

.....

35. What title is given to the elected political leader of a district?

.....

For questions 36 – 40, answer Christianity or Islam "BUT NOT"

both.

36. **Either:** Why is Judas Iscariot unpopular in Christianity?

.....

Or: Why did prophet Muhammad migrate from Makkah to Madinah?

.....

37. **Either:** Name the place where Jesus was crucified.

.....

Or: Name the place where prophet Muhammad was stoned.

.....

38. **Either:** How many days do Christians take fasting?

.....

Or: How many days do Muslims take fasting in the holy month of Ramadhan?

.....

39. **Either:** Why do you think Simon Peter denied Jesus?

.....

.....

Or: Why do you think Muslims men sit separately from women during prayer?

.....
.....

40. **Either:** Give one reason why Abraham is remembered in Christianity.

.....
.....

Or: Give one reason why prophet Ibrahim is remembered in Islam.

.....

SECTION B(60 marks)

41(a) Mention one date when equinox occurs.

.....

(b) On which line of latitude is the sun directly over head when there is winter season / snow in Europe?

.....

(c) Why are angora goats mainly kept?

.....

(d) Give one way the Oases are important to farmers in the desert.

.....

42(a) Name the official who signed the Buganda agreement of 1900 on behalf of the British.

.....

(b) Why didn't Kabaka Daudi Chwa sign the Buganda agreement of 1900 himself?

.....

(c) Why was the land for the Kabaka and his people according to the Buganda agreement called Mailoland?

.....

(d) Why was Kabaka Daudi Chwa ruling Buganda when his father Kabaka Mwanga was still alive?

.....
.....

43(a) Name the temperate grasslands of South Africa.

.....

(b) Identify the natural vegetation that covers most parts of Africa.

.....

(c) Why do lions prefer to live in the savanna grasslands and yet they are not grass eaters.

.....

(d) Give one reason why people carry out poaching.

.....

44(a) Who were the founders of the Bunyoro – Kitara empire?

.....

(b) Mention one way the Chwezi contributed to the development of farming in Uganda.

.....

(c) State any one disaster that led to the collapse of the Chwezi state of Buyoro Kitara.

.....

(d) Mention one factor that made it difficult for one person to rule.

.....

45. Muzeyi earns a monthly income of 1,400,000/= and uses it as follows.

- (i) Food – 600,000/=
- (ii) Rent – 400,000/=
- (iii) fees – 300,000/=
- (iv) others – 500,000/=

(a) How much money does he spend in one month?

.....

(b) What type of budget does he operate?

.....

(c) How much money does he borrow monthly?

.....

(d) Draw a diagram to illustrate muzeyi's budget in the space below.



46(a) Who was the leader of the He – He rebellion?

.....

(b) Why was German rule unpopular in Tanganyika?

.....

(c) What was the main cause of the MAU – MAU rebellion?

.....

.....

(d) Which rebellion was known as the Uganda Mutiny?

.....

47(a) Name the European explorer who drowned at the Bussa falls on R. Niger.

.....

(b) Who were the first European explorers to come to East Africa?

. (c) Why did Bartholomew Diaz call the Southern tip of Africa the cape of storms?

.....
.....

(d) How was Jacob Edhardt's sketch map of East Africa helpful to the early European explorers to Africa?

.....
.....

48(a) Complete the table below correctly.

	Organ of government	Function
(i)	To make laws
(ii)	Executive
(iii)	To administer justice

(b) Name the law making body of the East African community?

.....

49(a) Which countries qualify to be the members of the African Union?

.....

(b) Name one country in Africa that was not colonized.

.....

(c) State one achievement of the organization for African Unity.

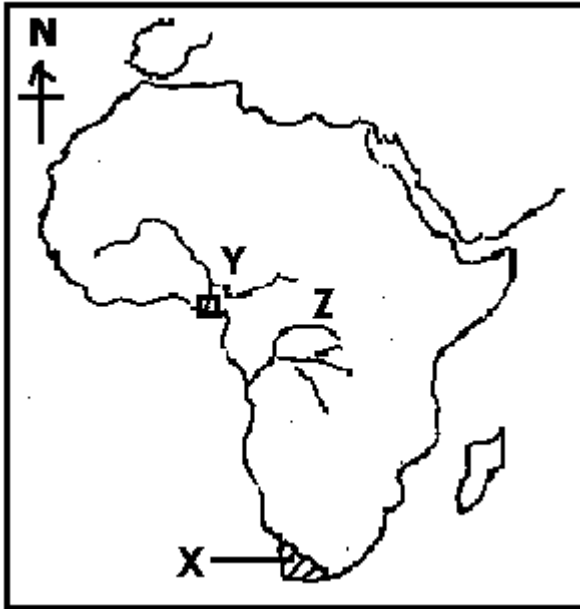
.....

.....

(d) How did Eritrea's acquisition of independence in 1993 affect Ethiopia's location?

.....

Use the map below to answer questions 50.



50(a) Name the climate experienced in the area marked X.

.....

(b) Which mineral is mined at the delta of the river marked Y.

.....

(c) Name the river marked with letter Z.

.....

(d) Use letters T T T T to show the Atlas Mountains.

For questions 51 – 55, answer either Christianity or Islam but

Not both.

51. **Either:** (a). Mention one type of prayer.

.....

(b) Which prayer did Jesus teach His apostles?

.....

(c) Mention any two things that Christians ask for in the prayer your have name in (b)

above

(i)

(ii)

Or: (a). Mention one type of prayer.

.....

(b) Name one compulsory prayer in Islam.

.....

(c) Give any two groups of Muslims who should not pray.

(i)

(ii)

52. **Either:** (a) Give any two things Christians are supposed to follow during Lent.

(i)

(ii)

(b) State any two events that took place in the Holy week.

(i)

(ii)

Or: (a) Give two things Muslims are encouraged to do during the Holy Month of Ramadhan.

(i)

(ii)

(b) State any two groups of Muslims that are not supposed to fast in the holy month of Ramadhan.

(i)

(ii)

53. **Either:**(a) Write two things Christians believe will happen to them when they die.

- (i)
- (ii)
- (b) Which two things should Christians do on earth to avoid being punished by God when they die?
- (i)
- (ii)

Or: (a) Write two things Muslims believe will happen to them when they die.

- (i)
- (ii)
- (b) Which two things should Muslims do on earth to avoid being punished by Allah when they die?
- (i)
- (ii)

54. **Either:** Complete the table below correctly.

	Sacrament	Importance
i	Makes one a member of God's family.
ii	Confirmation
iii	Unites man and woman as wife and husband.
iv	Holy Eucharist

Or: Complete the table below correctly.

	Prophet	Holy book received
I	Injil.
ii	Moses
iii	Zabur
iv	Muhammad

55. **Either:** (a) Who were the first two people to be created by God?

(i)

(ii)

(b) How did man spoil his relationship with God?

.....

(c) How can Christians reconcile with God today?

.....

or: (a) Who were the first two people to be created by Allah?

(i)

(ii)

(b) Name the place where Allah re – united the first two people after leaving paradise.

.....

(c) How can Muslims reconcile with Allah today?

.....

“Time to get serious